


Review for Statics and Magnetism Quest

A- Multiple Choice

1. The following diagram shows two bar magnets and compasses placed in a certain way.

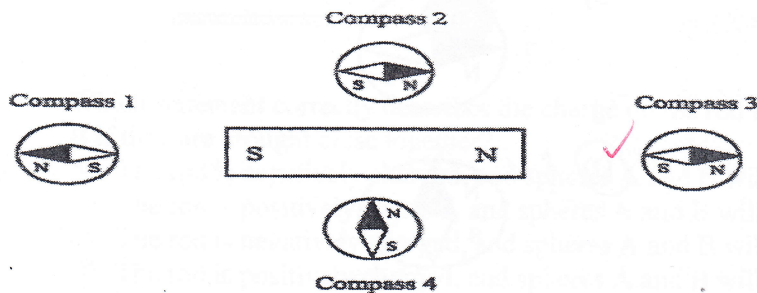


The poles are not indicated on magnets 1 and 2 in the diagram, but the compass needles show the direction of the magnetic fields of these magnets.

Which of the following diagrams correctly indicates the poles of these magnets?

- A) S Magnet 1 N N Magnet 2 S
- B) S Magnet 1 N S Magnet 2 N
- C) N Magnet 1 S N Magnet 2 S
- D) N Magnet 1 S S Magnet 2 N

2. The following diagram shows a bar magnet and four compasses.



Which compass shows the needle pointing in the correct direction?

- A) Compass 1 B) Compass 2 C) Compass 3 D) Compass 4

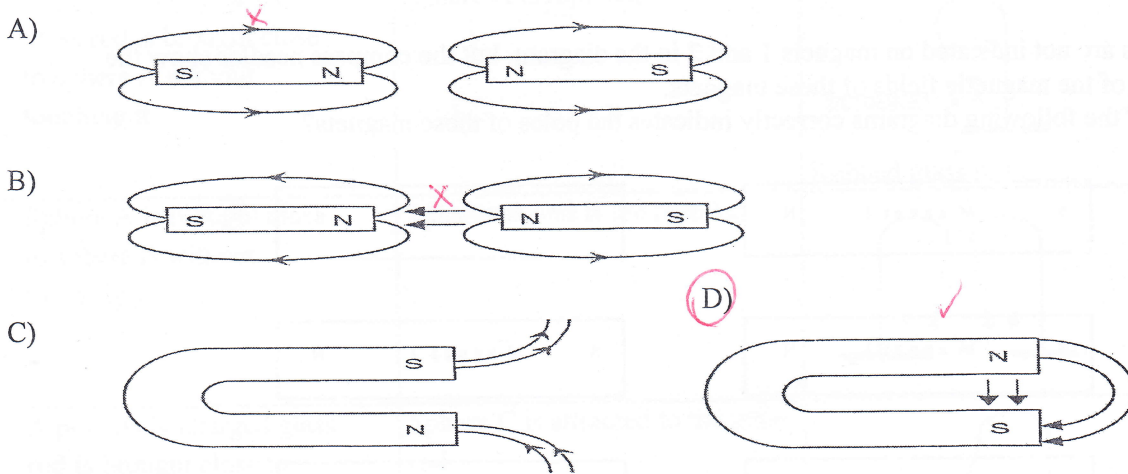
3. Static electricity can make hair stand up straight in the air as shown in the picture below.



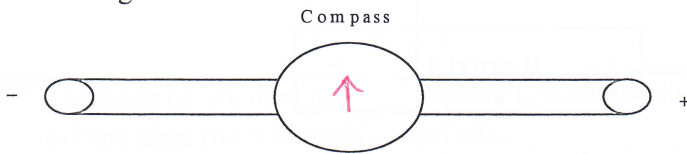
Which statement explains the behavior of hair in this situation?

- A) The strands of hair have opposite charges and therefore repel one another.
- B) The strands of hair and the air have opposite charges, so the hair is attracted by the air.
- C) The strands of hair have like charges and therefore repel one another.
- D) The strands of hair and the air have like charges, so the hair is attracted by the air.

4. Which of the following diagrams correctly shows the direction of the magnetic field lines?




5. The following diagram shows a compass placed over a conducting wire. Electricity is flowing through this wire.



Which of the following compasses shows the needle pointing in the correct direction for this situation?



6. The triboelectric series (electrostatic list) below shows the tendency of certain materials to acquire or give up negative charges.

Rubber	Acquires negative charges  Gives up negative charges
Polyethylene	
Cotton	
Paper	
Silk	
Wool → (-)	
Glass → (+)	
Fur	

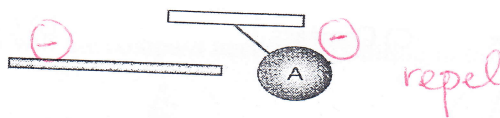
After a glass rod and a piece of wool are rubbed together for a few seconds, they are brought close together. Which of the correctly indicates the charge of the glass rod and the piece of wool after they are rubbed together, as well as their behavior when they are brought close to each other?

	Charge on the glass rod	Charge on the piece of wool	Behaviour
A)	Negative	Positive	They attract each other.
B)	Positive ✓	Negative ✓	They attract each other. ✓
C)	Negative	Positive	They repel each other.
D)	Positive	Negative	They repel each other.

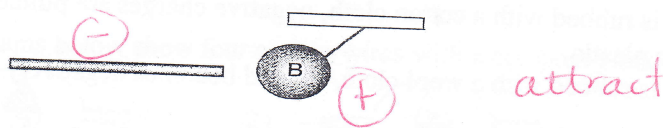
7. Two charged spheres (A and B) are suspended from a wire as shown in the diagram below. Sphere A is negatively charged, but we do not know the charge on sphere B.

A student carries out the following steps to see how the spheres behave.

Step 1 - She brings a charged rod close to sphere A.



Step 2 - She brings the same rod close to sphere B.

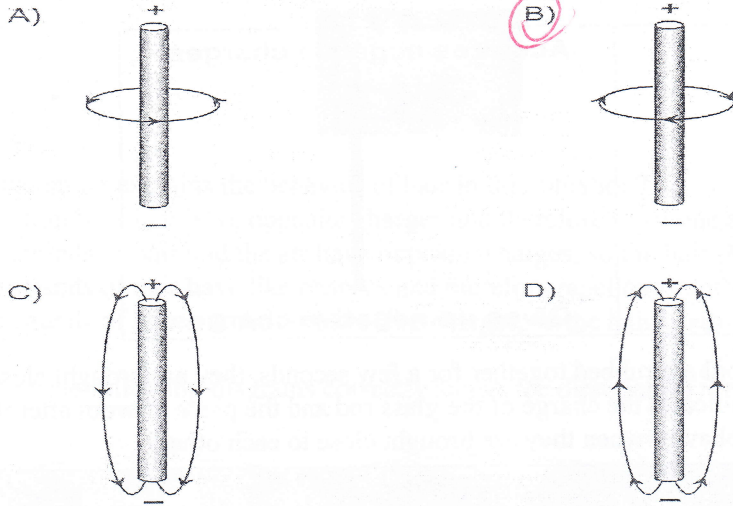


} ∴ A + B have opp. charges

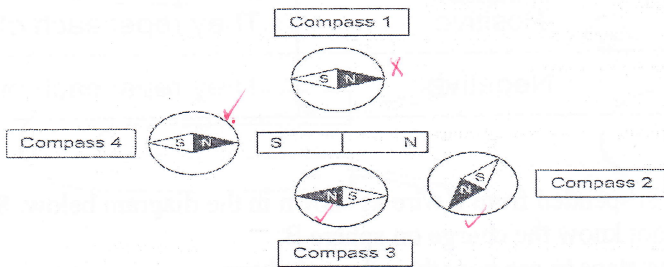
Which statement correctly describes the charge on the rod and the behavior of the spheres A and B if they are brought close together?

- A) The rod is negatively charged, and spheres A and B will repel each other.
- B) The rod is positively charged, and spheres A and B will attract each other.
- C)** The rod is negatively charged, and spheres A and B will attract each other.
- D) The rod is positively charged, and spheres A and B will repel each other.

8. An electric current flowing through a straight wire produces a magnetic field. Which of the following diagrams correctly represents the magnetic field lines?



9. When compasses are placed near a bar magnet, their needles point in different directions because the magnet has a magnetic field that influences the position of the compass needles.



Which of the four compasses shown above has a needle that is not pointing in the correct direction?

- A) Compass 1 B) Compass C) Compass 3 D) Compass 4

10. Through friction, electrical charges can be transferred from one material to another. Two examples of this are given below.

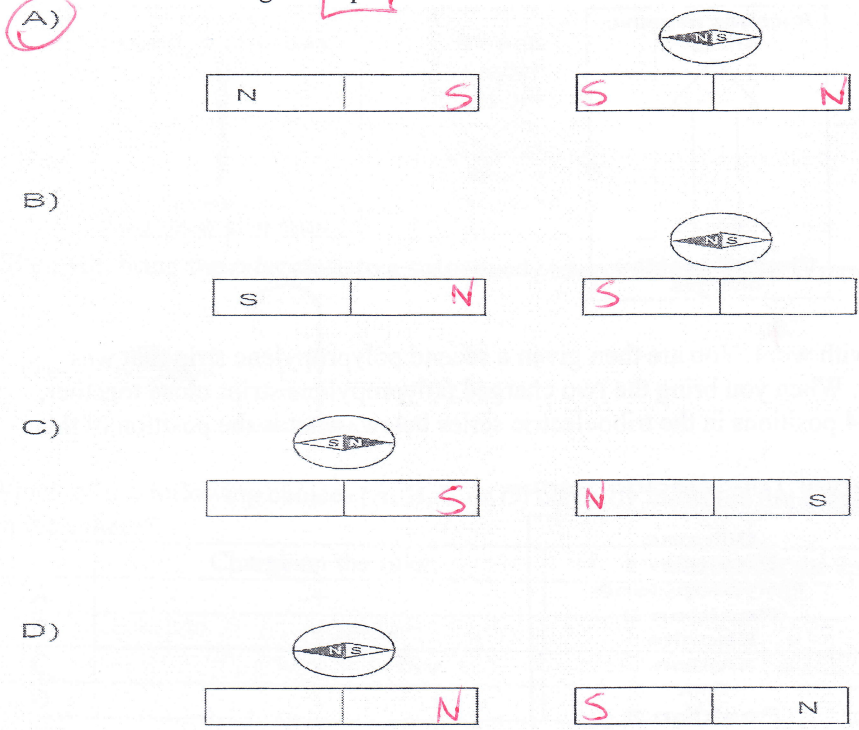
- 1) When a plastic ruler is rubbed with a cotton cloth, negative charges are pulled away from the cotton toward the plastic.
- 2) When a wooden rod is rubbed with a wool cloth, the rod becomes negatively charged.

Which statement below correctly describes the behavior of the four objects after they have been rubbed together?


- A) The ruler and the rod attract each other, and the cloths also attract each other.
 B) The ruler and the rod attract each other, but the cloths repel each other.
 C) The ruler and the rod repel each other, and the cloths repel each other.
 D) The ruler and the rod repel each other, but the cloths attract each other.

ruler (-) cotton (+) rod (wood) (-) wool (+)

11. Two magnets are placed next to each other. One pole of one of the magnets is identified, and a compass is placed above the other magnet. Which of the following choices represents a situation in which the two magnets repel each other?



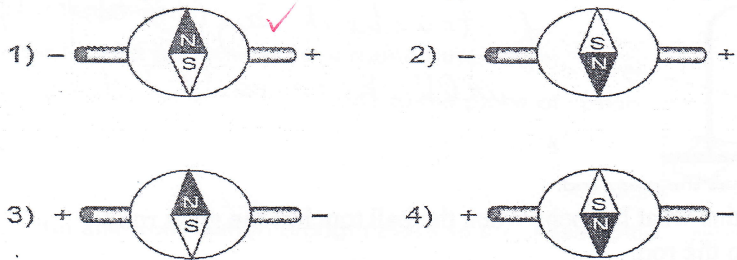
12. Two magnets and a compass are shown below.



In which direction will the compass needle be pointing in this situation?



13. The diagrams below show four copper wires with a compass placed on each wire.

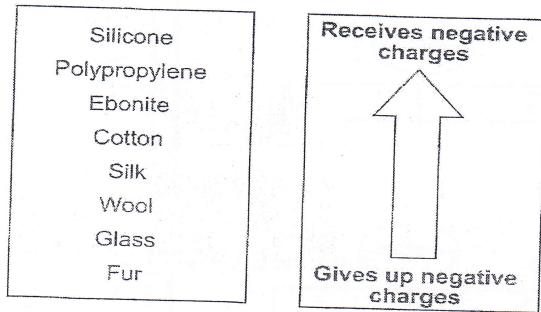


Which diagrams show the compass needle pointing in the CORRECT direction?

- A) Diagrams 1 and 3
 B) Diagrams 1 and 4
 C) Diagrams 2 and 3
 D) Diagrams 2 and 4

14. The following materials are listed according to their tendency to attract negative charges. The materials higher up on the list receive negative charges more easily.

Partial Triboelectric Series

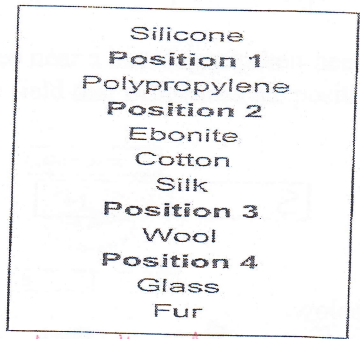


You rub the polypropylene strip with wool. You are then given a second polypropylene strip that was rubbed with an unknown material. When you bring the two charged polypropylene strips close together, they attract each other. Given the 4 positions in the triboelectric series below, what is the position of this unknown material?

opp charges
∴ 2nd strip (+)

- A) Position 1
- B) Position 2
- C) Position 3
- D) Position 4

Partial Triboelectric Series



only 1 material "above" polypropylene is, only 1 possibility for polypropylene to be (+)

15. Diagram 1 below shows what happens to an electrically neutral ball suspended from a wire when a positively charged glass rod is brought close to it.

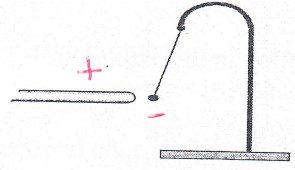
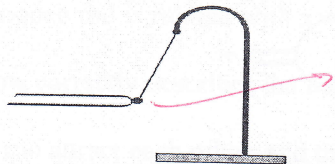


Diagram 1: The ball is attracted to the glass rod.

Diagram 2 below shows the same ball touching the glass rod.



if touched by (+) object, will become (+) too

Diagram 2: The ball touches the glass rod.

Which of the following statements explains what happens when the ball touches the glass rod?

- A) The ball gives up negative charges to the rod.
- B) The ball gives up positive charges to the rod.
- C) The ball receives negative charges from the rod.
- D) The ball receives charges from the rod.

16. In a laboratory experiment, you rub a vinyl ruler with a piece of wool. Those materials become charged according to the following triboelectric series (electrostatic list)

TRIBOELECTRIC SERIES

Acquires negative charges	↑	Ebonite	
Gives up negative charges		Cotton	
		Vinyl	-
		Silk	
		Wool	+
		Glass	
		Acetate	



When you bring the ruler close to a suspended charged sphere, there is repulsion.



Which of the following choices (A, B, C or D) correctly indicates the charge on the ruler and the charge on the sphere?

	Charge on the ruler	Charge on the sphere
A	+	+
B	+	-
C	- ✓	+ ✗
D	- ✓	- ✓


17. Patrick rubs a glass bottle with a silk cloth, and Karen rubs the same glass bottle with a piece of cotton.



When used to rub the bottle, the silk and the cotton tend to acquire the negative charges from the glass.

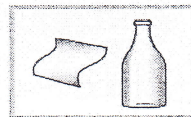
After Patrick and Karen have rubbed the bottle:

1. the silk cloth is brought close to the piece of cotton.



repel

2. the silk cloth is then brought close to the glass bottle.

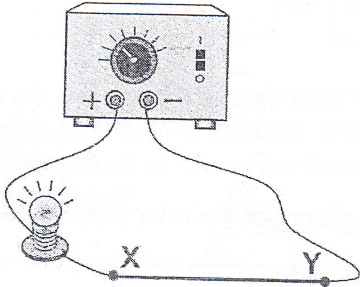


attract



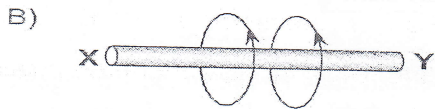

Which of the following choices correctly indicates the reactions between the different objects?

	Reaction bt the silk cloth and the piece of cotton	Reaction bt the silk cloth and the glass bottle
A	Attraction	Attraction
B	Attraction	Repulsion
C	Repulsion ✓	Attraction ✓
D	Repulsion ✓	Repulsion

18. The electrical circuit shown below is used on a light bulb.



Which of the following diagrams correctly represents the magnetic field lines around the part of the electric wire between X and Y?



19. A simple experiment can be conducted to show that a straw can be used to turn the pages of a book.



To do this, simply rub the polypropylene straw with the wool and then bring the straw close to the page of a book. The page will move toward the straw and stick to it, as illustrated above. The following materials are listed according to their tendency to attract negative charges. The materials higher up on the list attract negative charges more easily.

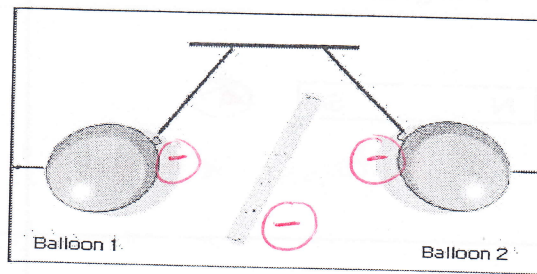
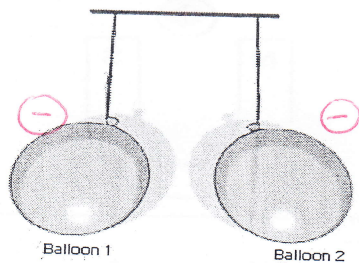
Polypropylene	-
Ebonite	
Cotton	
Silk	
Wool	+
Fur	
Glass	

Which of the following is the correct explanation for why the paper sticks to the straw?

- A) The straw is positively charged and attracts the negatively charged paper.
- B) The straw is negatively charged and attracts the neutral paper.**
- C) The straw acquires the negative charges from the wool and then attracts the negatively charged paper.
- D) The straw gives its negative charges to the wool and then attracts the neutral paper.

B. Short Answer

20. A student rubbed two identical inflated balloons on a piece of fur and suspended them from a high stand. He then rubbed a plastic ruler with a piece of wool and placed it between the two suspended balloons. The balloons quickly went high in the air as shown in the diagram below.



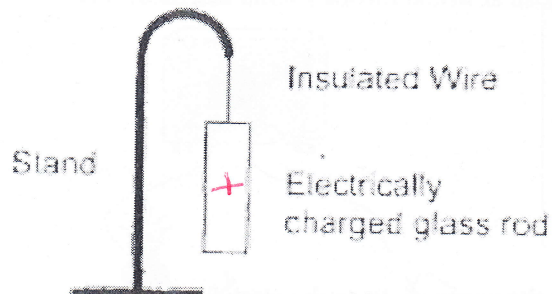
Knowing that the wool cloth transferred electrical charges to the ruler, determine the overall charge of the balloons, fur, ruler and wool cloth.

balloons: (-)
 fur: (+)
 ruler: (-) (repels balloons)
 wool: (+)

21. In the laboratory, you are asked to observe the electrical behaviour of certain materials using the following electrostatic list.

Capacity to gain electrons ↑	- Vinyl
	Silk -
	+ Wool
	Glass +

You start by rubbing a glass rod with a piece of silk and then suspend the electrically charged glass rod from an insulated wire.



You then rub a vinyl ruler with a piece of wool. Last, you bring the electrically charged vinyl ruler close to the suspended glass rod.

- A) State the charge on the glass rod. +
- B) State the charge on the vinyl ruler. -
- C) Will the glass rod and the vinyl ruler attract or repel? attract

22. Indicate the correct compass direction for each diagram below.

Diagram 1




Diagram 2




Diagram 3



Diagram 4

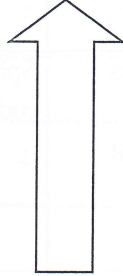


23. During a static electricity lab, a student rubs 5 pieces of different materials together two at a time. Table 1 below shows which of two materials were rubbed and which became negatively charged once they were rubbed.

Table 1- Negatively charged materials


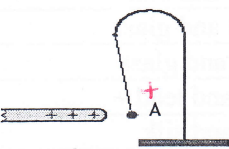

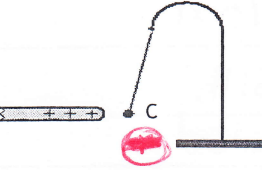
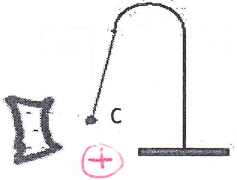
Materials being rubbed	Substance which gained electrons
Wood and nickel	Nickel
Wood and silk	Wood ✓
Wood and lead	Wood ✓
Lead and nickel	Nickel
Lead and silk	Silk →
Nickel and silk	Nickel
Nickel and glass	Nickel
Wood and glass	Wood ✓
Glass and lead -	Lead
Glass and silk	Silk →

Using the information in Table 1, you must put the 5 materials in order starting with the substance which will most easily gains electrons (becomes negatively charged) to the substance which will most easily lose electrons (becomes positively charged).

Object	Tendency to attract electrons
1. Nickel	
2. Wood	
3. Silk	
4. Lead -	
5. Glass	

Nickel → 4x negative
 Wood → 3x "
 Silk → 2x "
 Lead → 1x negative

24. Using the information in the table below, give the charge for spheres A, B and C and justify your answer.

Test	Observation	Sketch
1. The positively charged glass rod is brought close to sphere A without touching it.	Sphere A is repelled. 	 Rubbed glass rod
2. Sphere A is brought close to sphere B without touching it.	Spheres A and B are repelled.	
3. A positively charged glass rod is brought close to sphere C without touching it.	Sphere C is attracted to the glass rod.	 Rubbed glass rod
4. The piece of silk used to rub the glass rod is brought close to sphere C without touching it.	Sphere C is attracted to the piece of silk.	 Silk

	Charge	Explanation
Sphere A	\oplus	Repelled by \oplus charged rod.
Sphere B	\oplus	Sphere A + B need to have same charge since repelling
Sphere C	neutral	Attracted to both a \oplus and \ominus charged object.